

4 Times Table Activities


1. Count in 4s and colour in the grid:

1	2	3	4	5	6	7	8	9	10
11	12	13	14	15	16	17	18	19	20
21	22	23	24	25	26	27	28	29	30
31	32	33	34	35	36	37	38	39	40
41	42	43	44	45	46	47	48	49	50

2. Work out these answers:

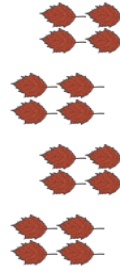
- a) $4 \times 4 =$ _____
 b) $3 \times 4 =$ _____
 c) $5 \times 4 =$ _____
 d) $2 \times 4 =$ _____
 e) $9 \times 4 =$ _____
 f) $6 \times 4 =$ _____
 g) $7 \times 4 =$ _____
 h) $1 \times 4 =$ _____
 i) $11 \times 4 =$ _____
 j) $8 \times 4 =$ _____
 k) $10 \times 4 =$ _____
 l) $12 \times 4 =$ _____

3. How many different leaves are there? Count in groups of 4 and write out the calculation.



a)

$$\text{---} \times \text{---} = \text{---}$$



b)

$$\text{---} \times \text{---} = \text{---}$$




c)

$$\text{---} \times \text{---} = \text{---}$$



Can you help the pirate find his way to the treasure? Starting at the top, circle the numbers in the 4 times table to create a path from the pirate to the treasure.

4 Times Table Maze

	Start	4	13	29	75	18	7
86	9	12	1	77	15	6	29
5	26	20	14	38	73	37	14
22	37	48	55	32	36	16	13
16	12	8	3	4	74	8	89
28	59	69	17	16	15	24	47
36	40	4	16	48	91	32	3
17	67	27	93	33	13	28	7
78	19	34	54	74	20	44	14

Finish

