

3 Times Table Activities

1. Count in 3s and colour in the grid:

1	2	3	4	5	6
7	8	9	10	11	12
13	14	15	16	17	18
19	20	21	22	23	24
25	26	27	28	29	30
31	32	33	34	35	36

2. Work out these answers:

- a) $3 \times 4 =$ _____
- b) $3 \times 3 =$ _____
- c) $3 \times 5 =$ _____
- d) $3 \times 2 =$ _____
- e) $3 \times 9 =$ _____
- f) $3 \times 6 =$ _____
- g) $3 \times 7 =$ _____
- h) $3 \times 1 =$ _____
- i) $3 \times 11 =$ _____
- j) $3 \times 8 =$ _____
- k) $3 \times 10 =$ _____
- l) $3 \times 12 =$ _____

3. How many pieces of fruit are there?



a) _____

_____ x _____ = _____



c) _____

_____ x _____ = _____



b) _____

_____ x _____ = _____

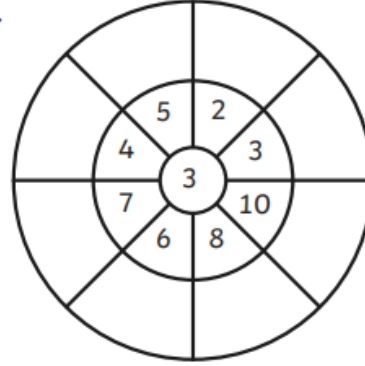


d) _____

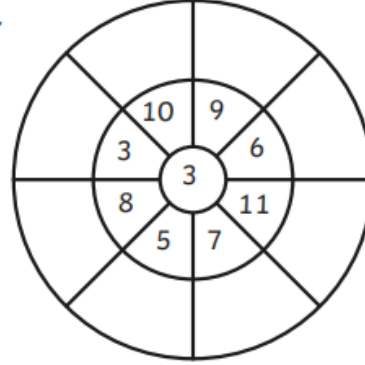
_____ x _____ = _____

3 Times Table Multiplication Wheels

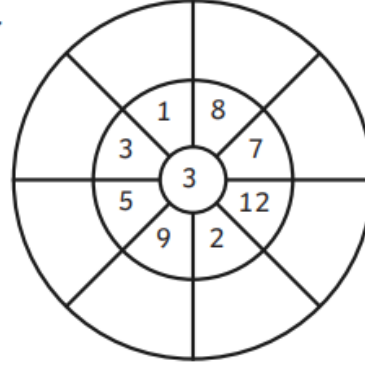
1.



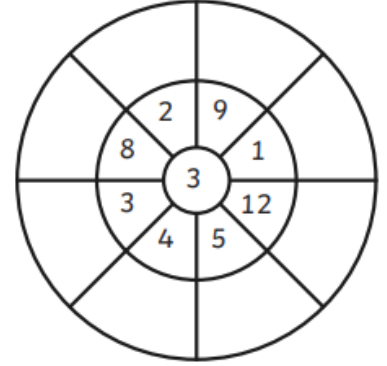
2.



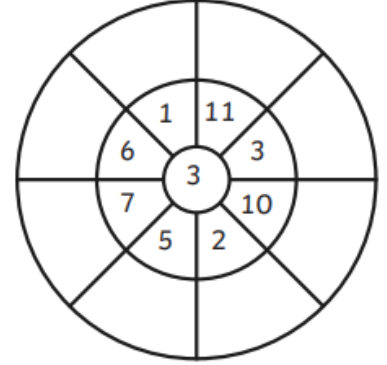
3.



4.



5.



6.

