

6 Times Table Activities

1. Count in 6s and colour in the grid:

1	2	3	4	5	6	7	8	9	10
11	12	13	14	15	16	17	18	19	20
21	22	23	24	25	26	27	28	29	30
31	32	33	34	35	36	37	38	39	40
41	42	43	44	45	46	47	48	49	50
51	52	53	54	55	56	57	58	59	60
61	62	63	64	65	66	67	68	69	70
71	72	73	74	75	76	77	78	79	80
81	82	83	84	85	86	87	88	89	90
91	92	93	94	95	96	97	98	99	100

2. Work out these answers:

a) $2 \times 6 =$ _____

b) $12 \times 6 =$ _____


c) $5 \times 6 =$ _____


d) $8 \times 6 =$ _____


e) $7 \times 6 =$ _____

f) $6 \times 6 =$ _____

3. How many blocks are there?

a)  _____ x _____ = _____

b)  _____ x _____ = _____

c)  _____ x _____ = _____

6x Table Search

2. Find the sets of 3 numbers from your 6x table number sentences. Colour them in. They may be horizontal, vertical or diagonal. Write the ones you find underneath. One is done for you as an example. How many can you find?

8	14	12	5	13	71	18	12	3	6
72	6	30	44	24	11	3	8	14	6
6	10	48	6	60	5	7	6	44	36
12	35	4	8	6	39	11	0	18	4
9	14	25	30	10	14	6	47	27	16
1	31	19	22	47	42	66	33	11	54
6	2	6	12	13	6	28	21	6	19
6	29	43	10	61	7	35	9	26	31

a. $4 \times 6 = 24$ _____

g. _____

b. _____

h. _____

c. _____

i. _____

d. _____

j. _____

e. _____

k. _____

f. _____

l. _____